

**N. K. Bagrodia Global School**  
**Sector-17, Dwarka, New Delhi**  
**Class -II, Session: 2019-20**  
**Assessment- 3**  
**Subject: E.V.S**

**Time:- 90 Min**

**Name**\_\_\_\_\_ **Class** \_\_\_\_\_ **Roll No.**\_\_\_\_\_ **Date:** \_\_\_\_\_

**MM: - 25**

**Instruction:-**

1. This question paper consist eight (7) questions.
2. Read all the questions carefully before answering.
3. Write neatly.
4. Attempt all questions.

---

**Ques1. Choose the correction option for the given statement. (2)**

1. Wind has \_\_\_\_\_ properties.  
(a)Four    (b) Five    (c)Three    (d) six
2. Where do plants cook their food?  
(a)roots    (b) stem    (c)leaves    (d) branch
3. National emblem contains which following animals?  
(a)Bull    (b) Elephant    (c) Horse    (d) All of these
4. Which one is the example of small water body?  
(a)Sea    (b) Lake    (c)ocean    (d) River

**Ques2. Fill in the blanks. (4)**

1. \_\_\_\_\_ is the closest planet to the sun.
2. \_\_\_\_\_ is written by Rabindra Nath Tagore.
3. The blades of \_\_\_\_\_ rotate to produce electricity.
4. Plants with weak stems are called \_\_\_\_\_

Ques3. Match the following.

(2)

|                          |            |
|--------------------------|------------|
| 1. Can climb up the wall | Cactus     |
| 2. Plateau               | Water body |
| 3.Desert                 | Climbers   |
| 4.Lake                   | Flat top   |

Ques4. Answer in one word.

(4)

1. Name the planet that got disappear from the solar system?

Ans - \_\_\_\_\_

2. The colour “green” in Tiranga refers to?

Ans- \_\_\_\_\_

3. By which man made means electricity is produced with the help of wind ?

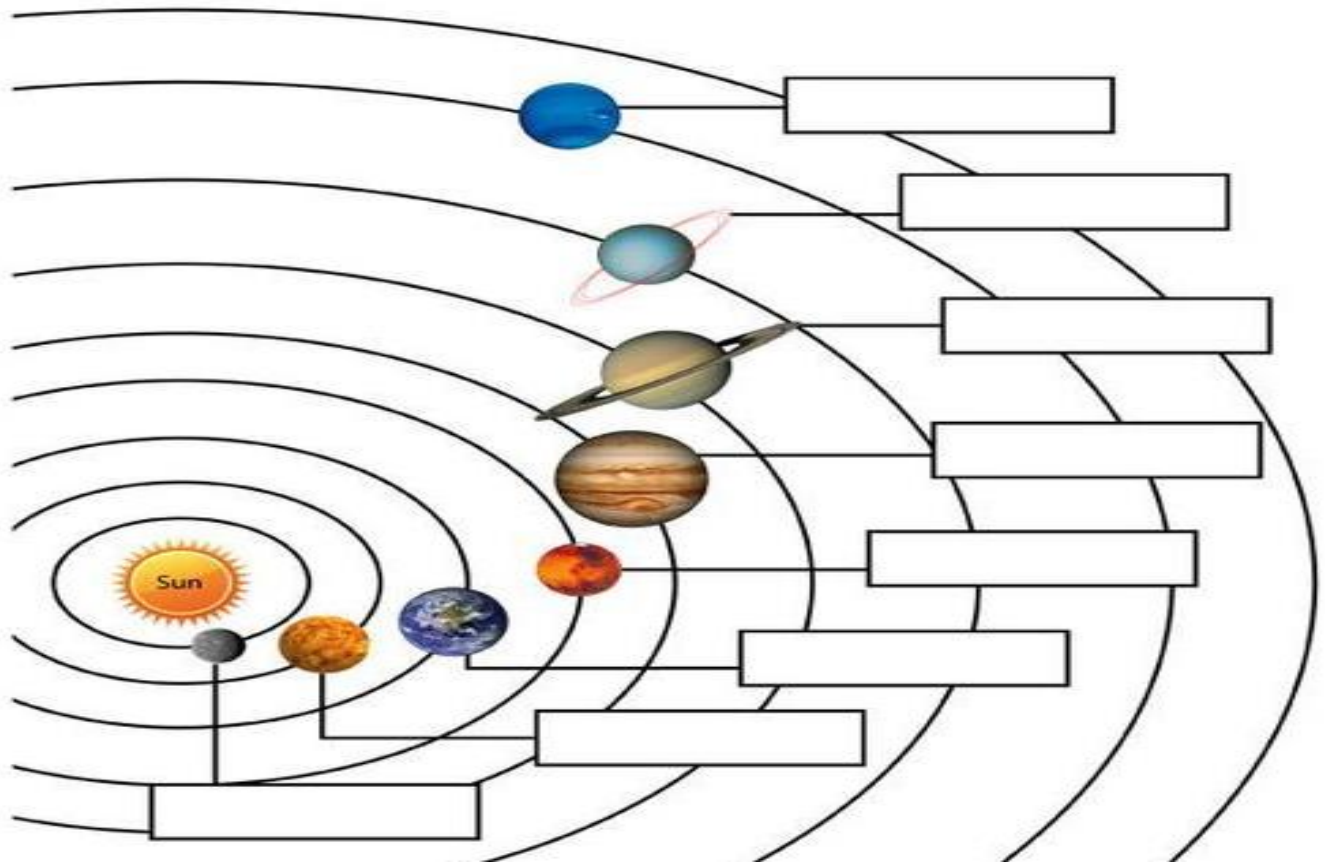
Ans - \_\_\_\_\_

4. It is also known as the top of the mountain?

Ans- \_\_\_\_\_

Ques5. Complete the diagram by labeling it correctly

(4)



Ques6. Answer the questions.

1. How does wind help new plants to grow? (2)

Ans- \_\_\_\_\_  
\_\_\_\_\_  
\_\_\_\_\_

2. Where do you live? Is it a desert? Why? (2)

Ans- \_\_\_\_\_  
\_\_\_\_\_  
\_\_\_\_\_


3. Write two lines about our national symbol? (2)

Ans- \_\_\_\_\_  
\_\_\_\_\_  
\_\_\_\_\_


3. Write names of the rivers which are flowing in India. (1)

Ans- \_\_\_\_\_  
\_\_\_\_\_


Ques7. Identify and name the picture. (2)




(a) \_\_\_\_\_



(b) \_\_\_\_\_



(c) \_\_\_\_\_



(d) \_\_\_\_\_